

SANT NIRANKARI PUBLIC SCHOOL

AVTAR ENCLAVE

CLASS -V

SUBJECT- ENGLISH

WORKSHEET 1 – POEM COMPREHENSION


Q. Read the poem and answer the questions that follow.

The Quarrel

Eleanor Farjeon

I quarreled with my brother,
I don't know what about,
One thing led to another
And somehow we fell out.
The start of it was slight,
The end of it was strong,
He said he was right,
I knew he was wrong!

We hated one another
The afternoon turned black.
Then suddenly my brother
Thumped me on the back,
And said, "Oh, come along!
We can go on all night -
I was in the wrong."
So he was in the right.



Word power

slight - little or unimportant
thump - give a heavy blow

Q1. Who were quarrelling with each other ?

Q2. Why did the afternoon turn black ?

Q3. Who thumped on the back of the girl ?

Q3. Give the opposite of the words – i. Wrong - _____ ii. Start - _____

Q4. Write the two pairs of rhyming words.

SANT NIRANKARI PUBLIC SCHOOL

AVTAR ENCLAVE

CLASS -V

SUBJECT- ENGLISH

WORKSHEET 2 –READING COMPREHENSION

Q1. Read the following passage from the Chapter -1 (Who will be Ningthou) and answer the questions that follow.

This story is from Manipur. In Manipuri, a king is called Ningthou and a queen is called Leima. Long, long ago, in the land of Kangleipak in Manipur, there lived a Ningthou and a Leima. They were loved dearly by the people. They had three sons Sanajaoba, Sanayaima and Santomba and a daughter Sanatombi. She was a lovely child, very gentle and loving. Years went by and the children grew up well. Then one day, the king decided to contest a horse race. He declared that whoever reached the banyan tree first, would be declared Ningthou.

1. Where is the land of Kangleipak ?
2. What is the king called in Manipur ?
3. Who was Sanatombi ?
4. How many sons did the Ningthou and Leima have ? What were their names ?
5. What did the king declare ?
6. Find out the synonym of the word 'Affectionate' from the above passage.
7. Make sentence of the word 'Lovely'.

SANT NIRANKARI PUBLIC SCHOOL

AVTAR ENCLAVE

CLASS -V

SUBJECT- ENGLISH (CB)

WORKSHEET 3- CH 4 PANDORA'S BOX

Q1. Read the following passage from the story 'Pandora's Box' and answer the questions that follow.

When the world was first created, it was a happy place of light and laughter. There was no such thing as sadness or pain. The sun shone every day and the gods came down from heaven to walk and talk with the humans who lived on the earth. One afternoon, a man called Epimetheus and his wife, Pandora, were outside, tending to their flower garden when they saw God Mercury approaching. He was bowed down by a dark, wooden chest that he was carrying on his shoulders and he looked hot and tired. Pandora rushed to get the worn out God a cool drink, while Epimetheus helped him lower the chest onto the ground. It was tied with golden cords.

1. Which things were not there when the world was first created ?
2. Why did the Gods come down on the earth ?
3. What were Epimetheus and his wife Pandora doing ?
4. What was God Mercury carrying ?
5. Give the opposites of the following words from the passage :
 - i. Happiness-
 - ii. Inside –

SANT NIRANKARI PUBLIC SCHOOL

AVTAR ENCLAVE

CLASS -V

SUBJECT- ENGLISH (GRAMMAR)

WORKSHEET 4 - CH 25 INTERROGATIVE SENTENCES

Q1. Make these sentences Interrogative.

- i. I have won.

- ii. Jia likes to read.

- iii. Tarun and Tia watch cartoons.

- iv. The Indian team won the match.

- v. Vineet sang well.

Q2. Complete the following conversation using the question words in brackets.

- i. Q. _____ (where)
A. Rohan is going to the market.
- ii. Q. _____ (who)
A. Neeta is the class teacher of class VI.
- iii. Q. _____ (what)
A. The time is 5 :00 pm.
- iv. Q. _____ (why)
A. I am wearing a new dress because today is my birthday.

SANT NIRANKARI PUBLIC SCHOOL

AVTAR ENCLAVE

CLASS -V

SUBJECT- ENGLISH

WORKSHEET 5- POEM (THE BRAVE LITTLE KITE)

REVISION

- Read the following stanzas very carefully and answer the questions that follow.

**Then, how the little kite thrilled with pride,
As he sailed with the big kite side by side!
While far below he could see the ground,
And the boys like small spots moving round.**

**They rested high in the quiet air,
And only the birds and clouds were there.
“Oh, how happy I am!” the little kite cried;
“And all because I was brave, and tried.”**

Q1. Fill in the blanks.

- The little kite was _____ with pride.
- The boys were moving round like small _____ .
- The _____ and _____ were there in the sky.

Q2. Write (T) for true statements and (F) for false statements.

- The little was very happy in the air.
- The little kite did not try to fly high.

Q3. Why was the little kite ‘thrilled with pride’ ?

Q4. Pick out two pairs of rhyming words from the above stanzas.

SANT NIRANKARI PUBLIC SCHOOL

AVTAR ENCLAVE

CLASS-V (EVS)

CH-5-THE AWESOME FIVE

ASSIGNMENT-1

Q1. Fill in the blanks

- a. The Jacobson's is the sensory organ of a _____.
- b. Many bats find their way by listening to _____.
- c. The taste buds of butterflies are on their _____.
- d. Ants used _____ to _____ and find their way and to _____.

Q2. Why do animals need sense organs?

Q3. What are Antennae and how are they used?

Q4. How do snakes smell and taste?

SANT NIRANKARI PUBLIC SCHOOL

AVTAR ENCLAVE

CLASS-V (EVS)

CHAPTER-12

RESPECT FOOD

ASSIGNMENT-1

Q1.Fill in the blanks.

- a. When food is exposed to _____for long time it gets spoiled.
- b. There are _____ types of food.
- c. Food get _____due to different reasons.
- d. Food usually get spoilt in _____.
- e. Very tiny living things are called _____.

Q2 What happens when we eat spoilt food?

Q3. Give two examples of perishable and non- perishable foods.

Q4. What is food spoilage? How it is caused?

SANT NIRANKARI PUBLIC SCHOOL

AVTAR ENCLAVE

CLASS –V (EVS)

CHAPTER-5

THE AWESOME FIVE

ASSIGNMENT-2

Q1. Give one word answer.

- a. Flies and mosquitoes have _____ eyes.
- b. Birds like _____ and _____ have powerful vision.
- c. Some animals like _____ produce high pitched sound.
- d. Elephants hear with the help of _____.
- e. Ducks have a transparent _____.
- f. The animal that have good night vision are called _____.
- g. Dolphins produce sounds like _____ and _____ to move through water.
- h. _____ can find things by sense of smell.

Q2. How do snakes smell and taste?

SANT NIRANKARI PUBLIC SCHOOL

AVTAR ENCLAVE

CLASS-V (EVS)

CHAPTER-12

RESPECT FOOD

ASSIGNMENT-2

Q1. Give one word answer.

- a. Food and vegetables can be preserved at home by keeping them in_____.
- b. Milk can be kept fresh by_____.
- c. _____is used to preserve jams and murabbas, fruits and vegetables.
- d. _____removes moisture from food and prevents the growth of microbes.

Q2. State True or False.

- a. Food kept in air tight container spoils faster.
- b. Salt and oil are preservatives.
- c. Foods that do not get spoilt easily are known as perishable foods.
- d. Vinegar is a preservative and it also adds flavour to food.

Q3. What is food preservation?

Q4. Explain four methods of food preservation.

SANT NIRANKARI PUBLIC SCHOOL

AVTAR ENCLAVE

CLASS –V (EVS)

CHAPTER-5

THE AWESOME FIVE

ASSIGNMENT-3

Q1. State true or false.

- a. A cat uses whiskers to detect things.
- b. Horse sleep with open eyes.
- c. Skin is the largest sense organ of our body.
- d. Human beings have strong sense of smell, stronger than dog.
- e. Giraffes sleep only for twenty minutes.

Q2. Why do butterflies walk on leaves laying their eggs?

Q3. How do animals communicate with other animals and human beings?

SANT NIRANKARI PUBLIC SCHOOL

AVTAR ENCLAVE

CLASS-V (EVS)

CHAPTER-12

RESPECT FOOD

ASSIGNMENT-3

SANT NIRANKARI PUBLIC SCHOOL

AVTAR ENCLAVE

CLASS-V (EVS)

REVISION WORKSHEET-CH-12

RESPECT FOOD

WEEK-4

Q 1. Match the following.

- | | |
|----------------------------------|----------------------|
| a. Milk | i. sugaring |
| b. Cured meat | ii. pasteurization |
| c. Murabba, jam | iii. pickling |
| d. Coffee, fruits, seafood | iv. Salting |
| e. Vinegar, salt ,oil | v. canning |
| f. Vacuum is formed in container | vi. Freezing- drying |

Q 2. State true or false.

- Food usually get spoiled in winter.
- Vinegar is a preservative and it also adds flavour to food.
- We can prevent spoiling of food by preserving it.
- Salt and oil are not preservatives.
- Food do not get spoilt easily are perishable food.
- Food preservation removes moisture from food and prevents the growth of microbes.

Q 3.Fill in the blanks with the correct answers.

1. In the _____ (pickling/freeze-drying) method, vinegar, salt and oil are added to raw or cooked vegetables and fruits.

2. The taste of the food and its nutritional value is maintained through _____ (preservation/pasteurization).

3. (Salting/Canning) _____ draws out moisture from the food and kills the bacteria present in it.

4. Pasteurization kills the microbes and _____ (does/does not) affect the flavour of the milk.

5. Freezing and refrigerating food involves storing food at a temperature _____ (lower/higher) than that needed for the bacteria to grow.

Q 5. Unscramble the words.

A. NANGINC

B. RAINVEG

C. GIPLINCK

D. INGLAST

SANT NIRANKARI PUBLIC SCHOOL

AVTAR ENCLAVE

CLASS-V (EVS)

REVISION WORKSHEET-CH-5

THE AWESOME FIVE

WEEK-2

Q 1. Give one word answer.

- a. The animal have large eyes that gives them good vision in night _____.
- b. Ducks have a transparent material that covers their eyes when they dive into water. _____
- c. The animals that kills and eat other animals. _____
- d. Honey bees tell each other about nectar by flying in a special way. _____

Q 2. Fill in the blanks.

- a. Some animals like _____ produce high pitched sounds.
- b. Flies and mosquitoes have _____ eyes.
- c. Elephants hear with the help of _____.
- d. _____ sleep with their eyes open.

Q.3. Who am I?

1. You will often find me around open sweet food items
2. I need to turn my head to see
3. I find hidden things by sniffing
4. I can taste with my feet
5. I smell with my tongue
6. I can look in many directions simultaneously
7. I look like a teddy bear and need eighteen hours of sleep a day

Assignment for the month of August

कक्षा - पाँचवी

विषय - हिन्दी

पाठ - 6 (क्रिया)

प्र० 1. नीचे लिखे वाक्यों में आई क्रिया के काल का नाम

लिखिए :-

- (क) कल मेरे मामाजी आए थे।
 (ख) सूर्य पूर्व दिशा से निकलता है।
 (ग) शायद कल वर्षा होगी।
 (घ) नेता जी ने भाषण दे दिया।
 (ङ) राम कल बाजार जायगा।

प्र० 2. वाक्यों को निर्देशानुसार बदलिए।

- (क) सक्षम घेत पर बैठकर पढ़ रहा था। (वर्तमान काल)
 (ख) बच्चे नाच रहे हैं। (भूतकाल)
 (ग) मदन मेरे साथ खेलता है। (भविष्यत)

प्र० 3. कर्म को उचित क्रिया से मिलाइए।

- | | | |
|-----|------|-------|
| (क) | चावल | काटना |
| (ख) | सोझी | खेलना |
| (ग) | लूडो | खाना |

Assignment for the month of August :-

कक्षा - पांचवी

विषय - हिंदी

पाठ - 8 (अशुद्ध को शुद्ध करना)

प्रश्न 1. नीचे लिखे अशुद्ध शब्दों के शुद्ध रूप लिखो।

(क) क्षात्र -

(ख) वैयानिक -

(ग) परिका -

(घ) चांद -

(ङ) ग्यान -

प्रश्न 2. निम्न वाक्यों को शुद्ध रूप में लिखो।

(क) दीवार पर नहीं लिखो।

(ख) मेरी पापा कवयित्री है।

(ग) उसने अनेकों पुस्तकें लिखी।

प्रश्न 3. नीचे लिखे शब्दों के शुद्ध रूप पर गोल लगाओ।

(क) परनाम

प्रनाम

प्रनाम

(ख) दिनाक

दिनाक

दिनांक

(ग) भूमी

भूमि

भूमि

(घ) स्वास्थ

स्वास्थ्य

स्वास्थ्य

Assignments for the month of August

कक्षा - पाँचवीं

विषय - हिंदी

पाठ - 8 (वे दिन श्री क्या दिन थे)

प्र० 1. प्रश्नों के उत्तर दी।

(क) कुम्भी के दादाजी ने उसकी उनके जमाने के बारे में क्या बताया।

(ख) रौदित को वह पुरानी पुस्तक कहाँ मिली?

(ग) रौदित को मिली पुस्तक में किसके बारे में लिखा था?

(घ) आजकल बच्चे किसके जरिए पढ़ाई करते हैं?

प्र० 2. अपने व्यक्तिगत और सार्वजनिक जीवन में हम कंप्यूटर का इस्तेमाल किन-किन उद्देश्यों के लिए करते हैं।

| | |
|-----------|-----------|
| व्यक्तिगत | सार्वजनिक |
|-----------|-----------|

प्र० 3. नीचे लिखी वस्तुओं की बीस साल पहले क्या कीमत थी और अब इनका कितना दाम है?

(क) आलू -

(ख) चावल -

(ग) शक्कर -

(घ) दूध -

Assignment for the month of August

कक्षा - पाँचवीं

विषय - हिंदी

पाठ - प (रक्त माँ की लवली कविता)

प्र० 1. पृष्ठों के उत्तर दो।

- (क) कविता को पढ़ते समय आँखों के सामने क्या लगे हुए हैं?
- (ख) कविता पढ़ने के बाद मन में कैसे भाव उभरे हैं?
- (ग) इस कविता में रतन किस चीज से वंचित था।
- (घ) इस कविता के लेखक का नाम लिखो।

प्र० 2. 'बे' उपसर्ग से चार शब्द लिखो।

(क) _____

(ख) _____

(ग) _____

(घ) _____

प्र० 3. अपनी माँ के बारे में सोचते हुए नीचे लिखें

(क) वाक्यों को पूरा करो।

मेरी माँ बहुत खुश होती है जब _____

(ख) मेरी माँ चाहती है कि मैं _____।

प्र० 4. मुहावरों के अर्थ लिखो।

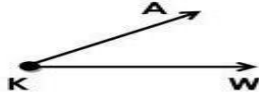
(क) आँख का तारा -

(ख) आँख दिखाना -

Maths Worksheet(Geometry)



Angles, Shapes and Parallel Lines



1 What is the name of this angle? _____

2 What the vertex of this angle? _____

3 What type of angle is this?

- a. obtuse angle b. acute angle c. right angle

4 Name the 2 rays of this angle:
_____ and _____

5 Use a ruler to draw 3 different quadrangles.

Classify the angles as acute, obtuse or right.

1.



2.



3.



4.



5.



6.



7.



8.



9.

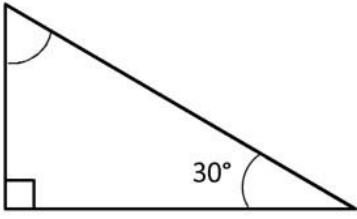
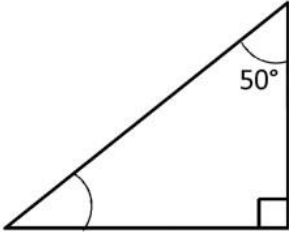
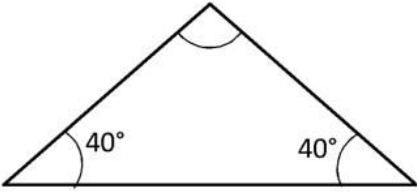
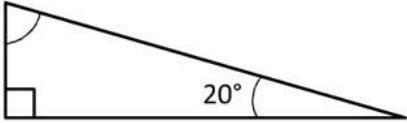
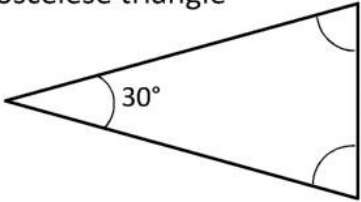
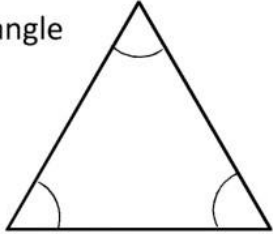
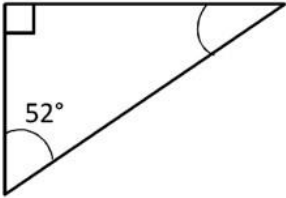
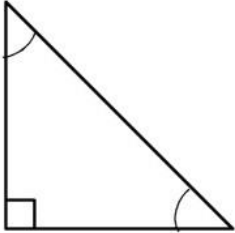


SANT NIRANKARI PUBLIC SCHOOL, AVTAR ENCLAVE

CLASS : V

Maths Worksheet(Geometry)

Work out the missing angles. Remember that the angles in a triangle add up to 180° . The angles are not drawn to scale, so do not try to measure them!

| | |
|---|---|
| 1)  | 2)  |
| 3)  | 4)  |
| 5) Isosceles triangle  | 6) Equilateral triangle  |
| 7)  | 8) Isosceles triangle  |

SANT NIRANKARI PUBLIC SCHOOL, AVTAR ENCLAVE

CLASS : V

Maths Worksheet(Fractions)

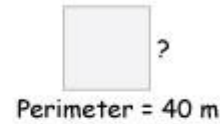
| | |
|---------------------------------------|---------------------------------------|
| 1 a. $7 \times \frac{1}{3} =$ | 1 b. $\frac{6}{10} \times 6 =$ |
| 2 a. $\frac{3}{5} \times 6 =$ | 2 b. $\frac{1}{5} \times 7 =$ |
| 3 a. $6 \times \frac{2}{6} =$ | 3 b. $2 \times \frac{2}{4} =$ |
| 4 a. $\frac{3}{10} \times 8 =$ | 4 b. $9 \times \frac{8}{9} =$ |
| 5 a. $3 \times \frac{1}{9} =$ | 5 b. $8 \times \frac{1}{10} =$ |
| 6 a. $\frac{6}{10} \times 2 =$ | 6 b. $10 \times \frac{3}{5} =$ |
| 7 a. $\frac{1}{9} \times 3 =$ | 7 b. $\frac{7}{8} \times 7 =$ |
| 8 a. $\frac{4}{9} \times 3 =$ | 8 b. $\frac{5}{7} \times 5 =$ |

SANT NIRANKARI PUBLIC SCHOOL, AVTAR ENCLAVE

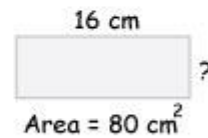
CLASS : V

Maths Worksheet(Perimeter and Area)

- (1) The perimeter of a square is 40 meters.
Find the length of one side of the square.
Answer:



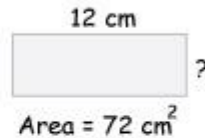
- (2) The area of a rectangle is 80 cm^2 .
If its length is 16 cm, what is its width?
Answer:



- (3) The area of a square is 49 mm^2 .
What is the length of each side?
Answer:



- (4) The length of a rectangle is 12 cm.
What is the width if the area is 72 cm^2 ?
Answer:



- (5) The perimeter of a rectangle is 160 cm.
The rectangle is 4 times longer than wide.
What are the length and width of this rectangle?
Answer:

