



Class - I


Assignment Date: - 03/07/2020 Submission Date: - 04/07/2020

Q.1 Tick (✓) the correct answer.




one car

two cars



one tree

two trees



one ball

four balls

Q.2 Look at the picture and complete the description.



This is a _____ (tree/trees)
I can see two _____
(bird/birds) on it. I
can see three _____
(apple/apples) on it.

Q.3 Write (T) for true or (F) for false.

1. Jumbo has three eyes. _____

2. He sees one monkey. _____

3. He has four bananas. _____

Q.4 How many does Jumbo have.

1. Eyes _____

2. Ears _____

3. Nose _____

**SANT NIRANKARI PUBLIC SCHOOL
AVTAR ENCLAVE, PASCHIM VIHAR
ENGLISH REVISION WORKSHEET-2
CLASS – I**

Assignment Date:- 06/07/2020

Submission Date:- 07/07/2020

Q.1 Tick (✓) the correct answer.

- a) Who has a ball?
(i) Amita (ii) Ravi
- b) Who loves kites?
(i) Rima (ii) Dev
- c) Where is the doll?
(i) On the bed (ii) on the chair

Q.2 Complete these sentences using is, am, are.

1. I _____ Mitthu.
2. Birds _____ flying in the sky.
3. The school bell _____ ringing.

Q.3 Complete the words with capital letters.

1. _____ (t)he fish is in the pond.
2. _____ (h)e wants his book.

Q.4 Use a, e, o to complete these words.

1. D ___ g
2. B ___ d
3. M ___ n
4. F ___ x
5. L ___ g

Class - I

Assignment Date: - 08/07/2020 Submission Date: - 09/07/2020

Q.1 Tick (✓) the correct answer.

- Rohit has _____
(a) an apple (b) a banana
- There is a _____ in the cage.
(a) cat (b) lion
- Priya and Raja see a _____
on the tree.
(a) monkey (b) bird

Q.2 Underline the naming word.

- Delhi is a big city.
- The apple is red.
- This bag is heavy.
- Ram is good in studies.

Q.3 Look at the picture and describe it.



- Raja goes to the _____
(park / school.)
- He sees a _____ there
(giraffe / dog).
- He also sees a _____
(cat / elephant).
- He is very _____
(happy / sad).

**SANT NIRANKARI PUBLIC SCHOOL
AVTAR ENCLAVE, PASCHIM VIHAR
ENGLISH REVISION WORKSHEET-4
CLASS – I**

Assignment Date:- 09/07/2020

Submission Date:- 10/07/2020

Q.1 Arrange these words in alphabetical order.

a) fat sat cat bat

Ans. _____

b) yell fed red wet

Ans. _____

c) hill wig zip bit

Ans. _____

Q.2 Read the naming words and write them under the correct column.

dog	teacher	pencil	hospital	cake	school
park	cat	father	book	mother	lion
doctor	zebra	bag	post office		

Person	Place	Animal	Thing

Q.3 Fill in the blanks using a or an.

1. _____ lion

2. _____ eagle

3. _____ insect

4. _____ nest

5. _____ teddy

6. _____ ostrich

Q.4 Fill in the blanks with a or an to complete the sentences.

1. _____ monkey is on the tree.

2. _____ aeroplane flies very high.

3. Mummy has _____ big bag.

4. _____ ant is on _____ leaf.

5. Parul is _____ small girl.

Sant Nirankari Public School
Autar Enclave, Paschim Vihar
Class - I

Page No.	
Date	

Hindi Revision Worksheet - 1

Assignment Date: - 07/07/2020 Submission Date: - 08/07/2020

प्र०1 वर्णों को जोड़कर शब्द बनाओ:-

1. र + थ = _____

2. झ + ल + क = _____

3. प + न + घ + ट = _____

4. ख + ा + न + ा = _____

5. ि + ट + स + ा + ब = _____

6. स + ा + ड + ि = _____

प्र०2 चित्र देखकर शब्द लिखो:-



- _____



- _____



- _____



- _____









- _____







- _____

प्र०३. चित्र देखकर सही शब्द पर
गोला लगाओ:-

1.		गज	जग
2.		कमल	कलम
3.		बरतन	अचकन
4.		ताला	गाजर
5.		टिकिट	चिड़िया
6.		चाबी	तीर

प्र०४. चित्रको पहचानकर सही शब्द
सँ मिलाओ:-

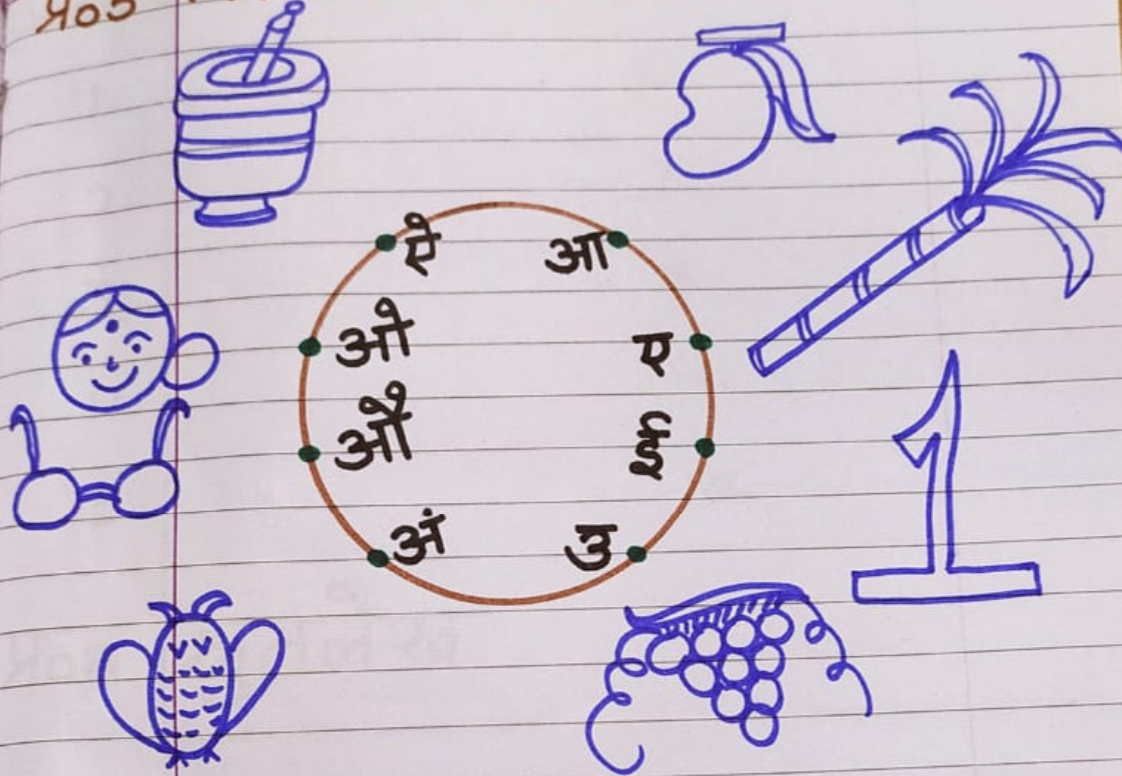
1.		बतख
2.		छाता
3.		किताब
4.		हाथी

Hindi Revision Worksheet - 2

Assignment Date: - 10/07/2020
Submission Date: - 11/07/2020

Page No.	
Date	

प्र०५ चित्र पहचानकर सही वर्ण से मिलाओ:-



प्र०६ पाँच फलों के नाम लिखो:-

1.

2.

3.

4.

5.

प्र०७ गिनती 1 से 10 तक लिखी

1.

6.

2.

7.

3.

8.

4.

9.

5.

10.

प्र०८ श्रुतलेख

SANT NIRANKARI PUBLIC SCHOOL
AVTAR ENCLAVE, PASCHIM VIHAR
MATHS WORKSHEET
CLASS – I
Revision

Assignment Date:- 04.07.2020

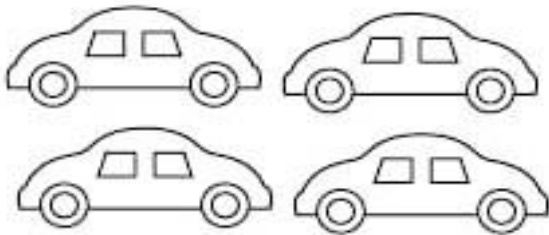



Submission Date:- 06.07.2020

Chapter: 1 - Comparison

Draw a star  around the bigger one.



Circle the group that has more.




Chapter: 2 - Numbers upto 9 :-

Put the sign ">", "<" or "="

2	○	0	4	○	2
8	○	9	2	○	5
9	○	0	3	○	7
1	○	5	7	○	9
1	○	1	2	○	2
5	○	6	9	○	4
4	○	8	2	○	1

Count and Circle the right numbers.


	6 7 8 9
--	---------

	6 7 8 9
--	---------

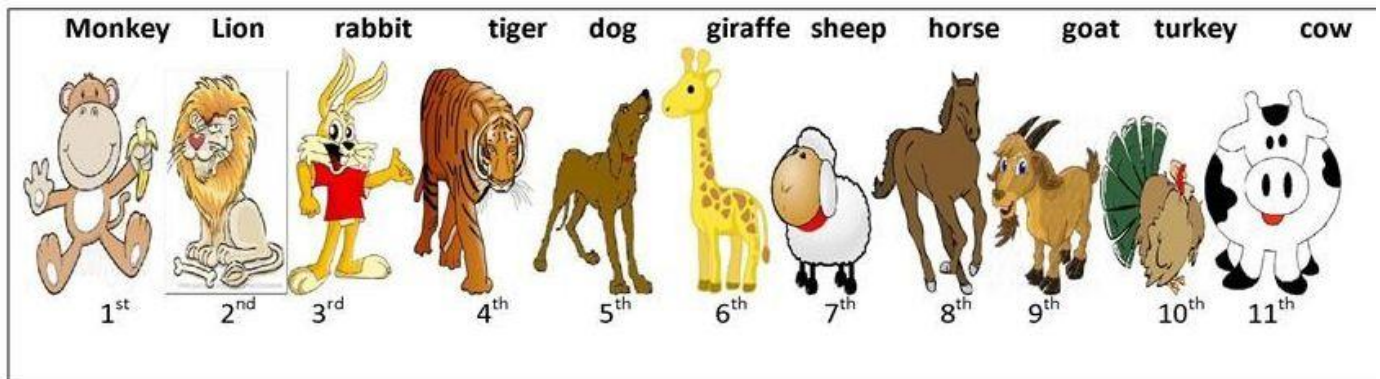
	7 8 9 10
--	----------

	6 7 8 9
---	---------

	7 8 9 10
--	----------

	6 7 8 9
--	---------

Ch: 3- Ordinal Number :-



Which animal is the:

1. Fourth – _____
2. Seventh – _____
3. Second – _____
4. Sixth – _____
5. Ninth – _____
6. First – _____
7. Third – _____
8. Tenth – _____
9. Eighth – _____

Color the second butterfly **blue** and the fourth butterfly **green**.



Color the first ball **yellow** and the fifth ball **red**.



Color the third fish **purple** and the fifth fish **orange**.



Color the third dog **green** and the fourth dog **blue**.



Color the first car **purple** and the third car **red**.



Miscellaneous

Q.1) Table of 0 :-

Table of 0

$$0 \times 1 = \underline{\hspace{2cm}}$$

$$0 \times 2 = \underline{\hspace{2cm}}$$

$$0 \times 3 = \underline{\hspace{2cm}}$$

$$0 \times 4 = \underline{\hspace{2cm}}$$

$$0 \times 5 = \underline{\hspace{2cm}}$$

$$0 \times 6 = \underline{\hspace{2cm}}$$

$$0 \times 7 = \underline{\hspace{2cm}}$$

$$0 \times 8 = \underline{\hspace{2cm}}$$

$$0 \times 9 = \underline{\hspace{2cm}}$$

$$0 \times 10 = \underline{\hspace{2cm}}$$

Q.2) Write the number names of :-

1 - _____

4 - _____

10 - _____

12 - _____

15 - _____

Q.3) Write missing numbers :-

1 _____, 3, 4, _____, _____

21, 22, _____, _____, 25, _____

43, 44, 45, _____, _____, _____

SANT NIRANKARI PUBLIC SCHOOL
AVTAR ENCLAVE
CLASS-I
SUBJECT:- COMPUTER
CHAPTER-1 (COMPUTER: A DIGITAL MACHINE)

Date: 10 July 2020

Submission: 11 July 2020

A. Choose the correct answer.

1. See-saw is an example of _____ machine.
a) Manual b) Natural
2. A Ship is a machine that runs on _____.
a) Fuel b) Electricity
3. Refrigerator is an example of _____ machine.
a) Manual b) Automatic
4. An/a _____ machine can work for a long time continuously.
a) Manual b) Natural
c) Human d) Automatic
5. A tablet is a type of _____.
a) Manual machine b) Computer
c) Natural machine d) Smart phone

B. Tick (✓) the correct statement and cross (✗) out the wrong one:

1. Computers are of different sizes.
2. All the computers are for personal use.
3. A smart phone is a type of computer.
4. A laptop is smaller than a tablet.
5. A computer is a machine.

C. Fill in the blanks:

Laptop, Natural, Machine, Sharpener, Electricity

1. A _____ saves our time and energy.
2. A _____ is a manual machine.
3. Washing machine runs on _____.
4. _____ is a type of computer.
5. Human beings are _____ machines.

D. Match the following:

1 Manual machine

2 Automatic machine

3 Natural machine

4 Tablet

5 All-in-One PC



E. Circle the Automatic machines from the following:

