

**SANT NIRANKARI PUBLIC SCHOOL  
AVTAR ENCLAVE PASCHIM VIHAR  
ENGLISH WORKSHEET  
CLASS – II**

**Date: 02/05/2020**

**Submission Date: 05/05/2020**

**Note:**

Dear Parent,

I am sending you English Grammar's Chapter – 4 with explanation and the exercise as an assignment. Kindly make them understand the chapter and try to do exercise with your help.



# Jumbled Sentences

Read the groups of words given below.

- (a) a bicycle Rina riding is
- (b) with the chicks mother hen is

These groups of words do not have any meaning.  
They do not make any sense.

Now, read the groups of words given below.

- (a) Rina is riding a bicycle.
- (b) Mother hen is with the chicks.

These words make complete sense.  
These words, when arranged in order, make complete sense.  
They form a *sentence*.

**Arrange these words to form sentences. Begin each sentence with a capital letter. Put a question mark (?) or full stop (.) at the end.**

1. sails on the ship the sea

.....

2. flies an aeroplane in the air

.....

3. your house where is

.....



4. the pram is the baby crying in

.....



5. sits on the ant the leaf

.....



6. brings the postman letters

.....



7. beautiful is country my

.....



8. a toy car has he

.....



9. a good John is boy

.....



10. should we country our love

.....



11. sings a song she

.....



12. are what eating you

.....



**SANT NIRANKARI PUBLIC SCHOOL  
AVTAR ENCLAVE PASCHIM VIHAR  
Hindi WORKSHEET  
CLASS – II**

**Date: 04/05/2020**

**Submission Date: 06/05/2020**

**Note:**

Dear Parent,

I am sending you Hindi Grammar's Chapter – 3 with explanation and the exercise as an assignment. Kindly make them understand the chapter and try to do exercise with your help.



# 3

## बिंदु और चंद्रबिंदु



ऊपर एक जंगल का चित्र है। जंगल में बंदर, बाँस और साँप दिखाई दे रहे हैं। जंगल और बंदर शब्दों में बिंदु (•) लगा है। बाँस और साँप शब्दों में चंद्रबिंदु (◌) लगा है। बिंदु और चंद्रबिंदु लगे शब्दों को अलग-अलग तरह से बोला जाता है।

बोलकर देखो।

हंस    हँस

दंत    दाँत

चंदा    चाँद

पंडित    पाँच

बंदर    बाँह

गंगा    गाँव

अंग    अँगूठा

संतरा    साँप

लंगूर    लँगड़ा

- बिंदु का चिह्न (◌) है और चंद्रबिंदु का (◌̣)।
- बिंदु और चंद्रबिंदु लगे शब्दों को अलग-अलग तरह से बोला जाता है।



1. मंजूषा से चुनकर बिंदु और चंद्रबिंदु लगे शब्दों को सही जगह पर लिखो।

गंगा मुँह आँख ताँगा घंटी डंडा साँप शंख

बिंदु \_\_\_\_\_

चंद्रबिंदु \_\_\_\_\_

2. चित्र देखकर शब्दों पर (◌) या (◌̣) लगाओ।



हस



चाद



पतग



बासुरी



पूछ



पखा

**SANT NIRANKARI PUBLIC SCHOOL  
AVTAR ENCLAVE PASCHIM VIHAR  
MATH WORKSHEET  
CLASS – II**

**Date: 01/05/2020**

**Submission Date: 05/05/2020**

**Note:**

Dear Parent,

I hereby sending you the Math's Chapter – 2 with explanation and the exercise as an assignment. Kindly make them understand the chapter and try to do exercise with your help.



# Lesson 2

## Addition of 2-Digit Numbers



Ankur has 13 mangoes.

	T	O
	1	3
+	1	1
	2	4



Sneha has 11 mangoes.

Together they have  $13 + 11 = 24$  mangoes.

We read it as 'thirteen plus eleven is equal to twenty four'.

Here, 13 and 11 are called 'addends' and 24 is called the 'sum'.

### Activity-1

Do you remember .....

Find the sum :

1.

	T	O
	2	6
+	3	3
_____		
_____		

2.

	T	O
	4	8
+	1	1
_____		
_____		

3.

	T	O
	1	5
+	3	2
_____		
_____		

4.

	T	O
	2	1
+	5	7
_____		
_____		

5.

	T	O
	4	7
+	3	2
_____		
_____		

6.

	T	O
	5	4
+	1	4
_____		
_____		

7.

	T	O
	6	1
+	1	7
_____		
_____		

8.

	T	O
	3	4
+	5	3
_____		
_____		



## Activity-2

### Word Problems

1.



In my class, there are 42 boys and 35 girls. How many students are there in the class?

Ans. There are ..... students in the class.

$$\begin{array}{r} T \quad O \\ 4 \quad 2 \\ + 3 \quad 5 \\ \hline \\ \hline \end{array}$$

2.



Raman plants some flowers in his garden. 54 flowers are pink in colour and 22 flowers are yellow in colour. How many flowers does Raman plant?


Ans. Raman plants ..... flowers.

T O

\_\_\_\_\_

\_\_\_\_\_

3.



Jyoti makes a necklace using 37 white beads and 20 pink beads. How many beads are there in the necklace?

Ans. Total number of beads is .....

T O

\_\_\_\_\_

\_\_\_\_\_

4.



Rohan was reading a book. He read 41 pages on Monday and 45 pages on Tuesday. How many pages did he read in the two days?

Ans. Rohan read ..... pages.


T O

\_\_\_\_\_

\_\_\_\_\_

# Addition Properties

## 1. Order in adding two numbers.

 $6 + 2 = 8$ 

 $2 + 6 = 8$ 



**Remember :** The numbers can be added in any order.  
The sum will be same in both the cases.

## 2. Order in adding three numbers.

$$(1 + 5) + 2 = 6 + 2 = 8$$

$$1 + (5 + 2) = 1 + 7 = 8$$

$$(1 + 2) + 5 = 3 + 5 = 8$$



**Remember :** The numbers can be grouped in any order.  
The sum will remain the same in all the cases.

## 3. Adding zero

$$6 + 0 = 6$$

$$15 + 0 = 15$$



**Remember :** When 0 is added to a number,  
the sum is the number itself.

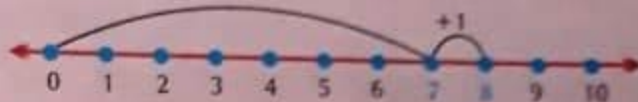
#### 4. Adding one

$$7 + 1 = 8$$

$$23 + 1 = 24$$



**Remember :**  
When 1 is added to a number,  
the sum is the next number on  
the number line.



### Activity-3

#### 1. Fill in the blanks :

- (a)  $5 + \square = 4 + 5$
- (b)  $24 + \square = 26 + 24$
- (c)  $8 + (6 + 5) = (\square + 6) + 5$
- (d)  $(15 + 12) + 9 = 15 + (\square + 9)$
- (e)  $23 + (\square + 10) = (23 + 16) + 10$

#### 2. Complete using addition facts :

- (a)  $18 + 0 = \square$
- (b)  $29 + \square = 29$
- (c)  $\square + 0 = 56$
- (d)  $95 + 1 = \square$

### Fun Time

Complete the pattern :

$$10 + 1 = 11$$

$$20 + 1 = 21$$

$$30 + 1 = \square$$

$$40 + 1 = \square$$

$$1 + 1 = 02$$

$$11 + 2 = 13$$

$$21 + 3 = \square$$

$$31 + 4 = \square$$

**SANT NIRANKARI PUBLIC SCHOOL  
AVTAR ENCLAVE PASCHIM VIHAR  
MATH WORKSHEET  
CLASS – II**

**Date: 05/05/2020**

**Submission Date: 09/05/2020**

**Note:**

Dear Parent,

In continuation of Math's Chapter – 2, I am sending you the exercise as an assignment. Kindly make them understand the chapter and try to do exercise with your help.

# Activity-4

Add the following :

1. 

H	T	O
○	○	
	5	9
+	6	1
<hr/>		
<hr/>		

2. 

H	T	O
○	○	
	7	3
+	3	7
<hr/>		
<hr/>		

3. 

H	T	O
○	○	
	5	7
+	6	4
<hr/>		
<hr/>		

4. 

H	T	O
○	○	
	8	9
+	4	8
<hr/>		
<hr/>		

5. 

H	T	O
○	○	
	5	6
+	5	6
<hr/>		
<hr/>		

6. 

H	T	O
○	○	
	4	8
+	8	5
<hr/>		
<hr/>		

7. 

H	T	O
○	○	
	3	4
+	9	7
<hr/>		
<hr/>		

8. 

H	T	O
○	○	
	8	5
+	5	9
<hr/>		
<hr/>		

9. 

H	T	O
○	○	
	2	6
+	9	8
<hr/>		
<hr/>		

## Activity-5

### Word Problems

1.



In a pond, there are 89 frogs and 23 turtles. Find the total number of frogs and turtles in the pond.

Ans. There are ..... frogs and turtles in the pond.

H	T	O
	8	9
+	2	3
_____		
_____		

2.



Meena has 64 Barbie stickers and 48 Kitty stickers. How many stickers does she have in total?

Ans. Meena has ..... stickers in total.

H	T	O
_____		
_____		

3.



A bookseller sells 72 books and 58 notebooks in a day. How many books and notebooks does he sell in total?

Ans. The bookseller sells ..... books and notebooks in total.

H	T	O
_____		
_____		

4.



Rajat has 66 marbles. Shyam has 56 marbles. How many marbles do they have in total?

Ans. They have ..... marbles.

H	T	O
_____		
_____		

# Addition of Three 2-digit Numbers without Regrouping

Let us take the numbers 21, 33 and 15.

Let us find their sum

	T	O		
	2	1	←	2 tens + 1 one
+	3	3	←	3 tens + 3 ones
+	1	5	←	1 ten + 5 ones
<hr/>				
	6	9		6 tens + 9 ones

$$21 + 33 + 15 = 69$$

## Activity-6

Find the sum :

1.

	T	O
	1	5
	1	1
+	1	3
<hr/>		
<hr/>		

2.

	T	O
	1	1
	1	7
+	3	0
<hr/>		
<hr/>		

3.

	T	O
	2	2
	3	3
+	4	4
<hr/>		
<hr/>		

4.

	T	O
	1	0
	3	0
+	5	0
<hr/>		
<hr/>		

5.

	T	O
	4	6
	4	1
+	1	1
<hr/>		
<hr/>		

6.

	T	O
	2	1
	1	6
+	3	2
<hr/>		
<hr/>		

7.

	T	O
	2	0
	1	2
+	4	2
<hr/>		
<hr/>		

8.

	T	O
	4	2
	3	3
+	2	4
<hr/>		
<hr/>		

## Activity-7

Add:

1.

T	O
○	
3	6
2	5
+	1
1	7

2.

T	O
○	
3	2
2	8
+	3
3	1

3.

T	O
○	
4	4
2	7
+	1
1	6

4.

T	O
○	
4	2
1	8
+	3
3	0

5.

T	O
○	
2	4
3	8
+	3
3	0

6.

T	O
○	
1	6
1	7
+	1
1	8

7.

T	O
○	
2	4
2	6
+	2
2	8

8.

T	O
○	
1	3
1	6
+	1
1	9

## Activity-8

### Word Problems



Rani has 12 pink ribbons, 19 red ribbons and 25 blue ribbons. How many ribbons does Rani have in total?

Ans. Rani has ..... ribbons.

T	O
○	
1	2
1	9
+	2
2	5



2.



A farmer has 54 cows, 28 goats and 12 sheep on his farm. How many animals does he have in total?

Ans. The farmer has ..... animals in total.

T  
O

3.



In a flower garden, Sneha counts 36 roses, 19 jasmines and 21 lilies. How many flowers does she count in total?

Ans. Sneha counts ..... flowers.

T  
O

### Mental Maths Corner

1. Tick (✓) the correct answer :

(a)  $49 + 22 =$

(i) 71

(ii) 61

(iii) 72

(b) I have 82 marbles. How many more marbles do I need to make 100?

(i) 12

(ii) 18

(iii) 15

(c)  $16 +$    $= 17$

(i) 1

(ii) 0

(iii) 16

(d)   $+ 29 = 50$

(i) 21

(ii) 31

(iii) 11

2. (a) If 0 is added to a number, the sum is .....

(b) How many ones does a ten have ? .....

(c) When 1 is added to a number, the answer is .....